

Activity Worksheet

Challenging brain

Sub : Mathematics

Grade: X

Date:

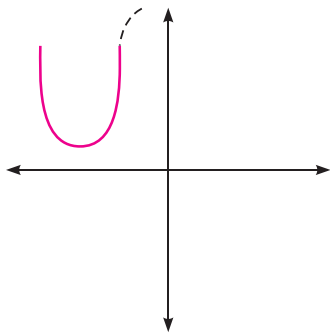
Name:

ID No.....

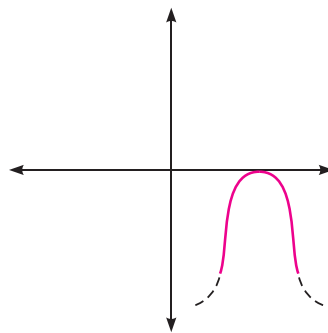
Multiple Choice Questions

4. Which of the following is not the graph of a quadratic polynomial?

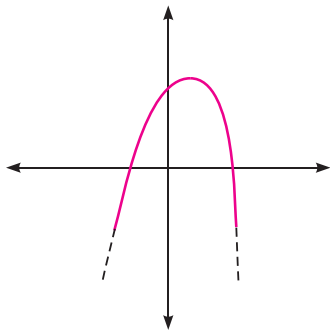
(a)



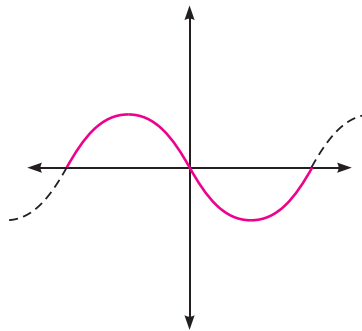
(b)



(c)



(d)



Sol.
